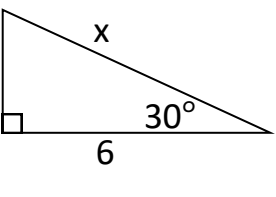
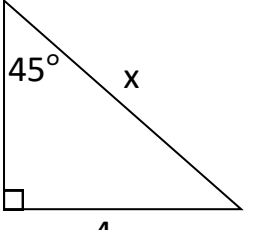
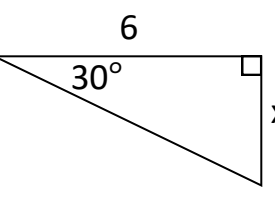
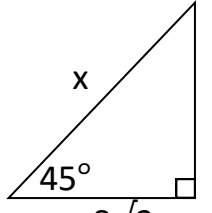
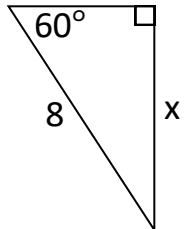
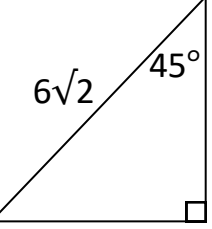
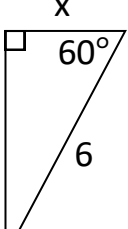
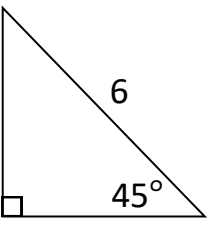
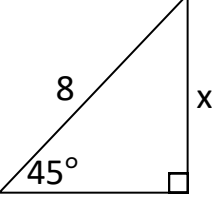
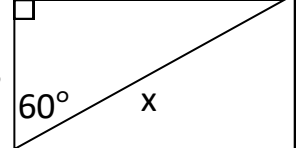
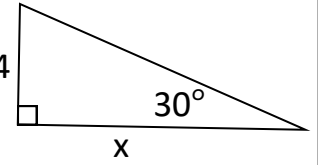


# Special Right Triangles Maze

Use the properties of 30-60-90 & 45-45-90 triangles to solve for x in each triangle

Name \_\_\_\_\_

Some boxes might not be used

 <p>Start</p>	$4\sqrt{3}$		$8$		$3\sqrt{3}$	
$8\sqrt{3}$	$4\sqrt{2}$	$8\sqrt{2}$	$6$	$2\sqrt{3}$	$4\sqrt{3}$	$4\sqrt{2}$
	$4$		$3\sqrt{2}$		$3$	
$4\sqrt{3}$	$6\sqrt{2}$	$8\sqrt{3}$	$4\sqrt{3}$	$3\sqrt{3}$	$4$	$3\sqrt{2}$
	$4\sqrt{2}$		$16$		$8\sqrt{3}$	<p>Finish</p>