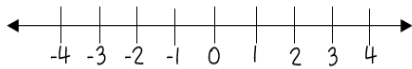


# Comparing Integers

Integers are numbers without fractional parts. They can be positive, negative, or zero. The further right a number is on the number line, the greater it is.



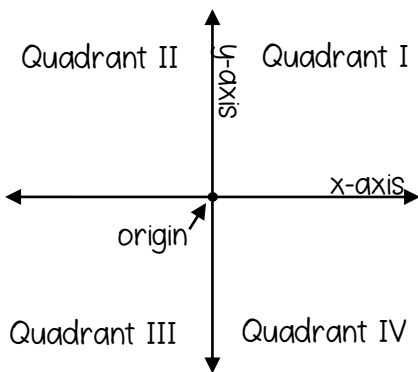
The absolute value of a number is the distance the number is from zero.

ex: compare with  $<$ ,  $>$ , or  $=$

$-7$   $\bigcirc$   $|-9|$   $\leftarrow$  The absolute value of  $-9 = 9$

$-7$   $\boxed{<}$   $9$

# The Coordinate Plane

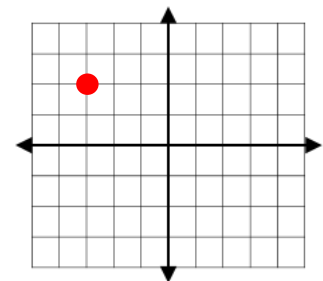


Ordered Pair:  $(x, y)$

To graph a point on the coordinate plane, start at the origin. The first number in the ordered pair (the x-coordinate) tells you how far left (if negative) or right (if positive) to move. The second number (the y-coordinate) tells you how far up (if positive) or down (if negative) to move.

ex: Graph the point  $(-3, 2)$  and state the quadrant in which it is located.

Start at the origin, and move LEFT 3 and UP 2



Quadrant II

# Perimeter, Area and Volume

- Perimeter of Any Polygon: add all side lengths

- Area of a Rectangle:  $A = lw$

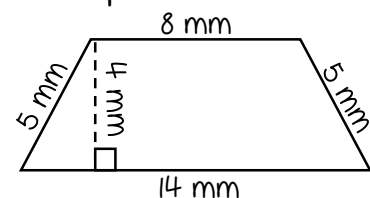
- Area of Parallelogram:  $A = bh$

- Area of Triangle:  $A = \frac{1}{2}bh$

- Area of Trapezoid:  $A = \frac{1}{2}h(b_1 + b_2)$

- Volume of Rectangular Prism:  $V = lwh$

ex: Find the perimeter & area:



Perimeter:  $P = 5 + 8 + 5 + 14 = \boxed{32 \text{ mm}}$

Area: This is a trapezoid, so use the area of a trapezoid

formula:  $A = \frac{1}{2}h(b_1 + b_2)$

The bases are the sides that are parallel, and the height is perpendicular to the bases.

$\rightarrow A = \frac{1}{2}(4)(8+14) = \boxed{44 \text{ mm}^2}$

Compare the integers with  $<$ ,  $>$ , or  $=$ .

45. $-4 \bigcirc -5$	46. $2 \bigcirc -2$	47. $ -5  \bigcirc  5 $	48. $-7 \bigcirc 6$	49. $-13 \bigcirc -9$
50. $ -7  \bigcirc -6$	51. $-17 \bigcirc -14$	52. $ -3  \bigcirc  -2 $	53. $0 \bigcirc -6$	54. $ -4  \bigcirc  6 $

Graph and label each of the ordered pairs in the coordinate plane. Then state the quadrant or axis in/on which the point is located.

55. A(2, 4)	56. B(0, -3)	
57. C(1, -1)	58. D(3, 3)	
59. E(-4, 1)	60. F(2, 0)	
61. G(-3, -2)	62. H(-2, 3)	
63. I(0, 2)	64. J(-1, -4)	

Find the perimeter, area, and/or volume of the given figure.

<p>65. Find the perimeter &amp; area:</p>	<p>66. Find the perimeter &amp; area:</p>	<p>67. Find the perimeter &amp; area:</p>
<p>68. Find the perimeter &amp; area:</p>	<p>69. Find the area of a square with a perimeter of 45 cm</p>	<p>70. Find the volume:</p>